
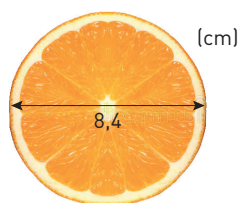




Cirkelns omkrets och area (II)


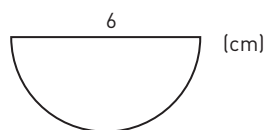
- 1 Beräkna apelsinskivans
 a) omkrets. Avrunda till hela centimeter.
 b) area. Avrunda till hela kvadratcentimeter.




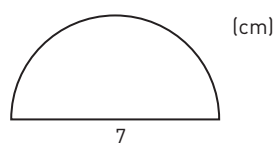
- 2 Beräkna tallrikens area. Avrunda till hela kvadratdecimeter.



- 3 Hur stor area har halvcirkeln? Avrunda till hela kvadratcentimeter.



- 4 Beräkna halvcirkelns
 a) omkrets. Avrunda till hela centimeter.
 b) area. Avrunda till hela kvadratcentimeter.



Cirkelns omkrets och area (II)

FACIT

- 1 a) 26 cm
b) 55 cm²
- 2 5 dm²
- 3 14 cm²
- 4 a) 18 cm
b) 19 cm²