
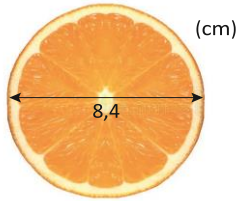



Cirkelns omkrets (II)


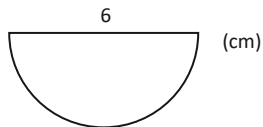
1. Beräkna apelsinskivans omkrets. Avrunda till hela centimeter.




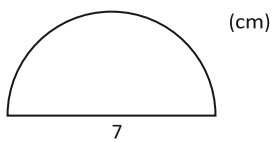
2. Beräkna tallrikens omkrets. Avrunda till hela decimeter.



3. Hur stor omkrets har halvcirkeln? Avrunda till hela centimeter.



4. Beräkna halvcirkelns omkrets. Avrunda till hela centimeter.



Cirkelns omkrets (II)

FACIT

1. 26 cm
2. 8 cm
3. 15 cm
4. 18 cm