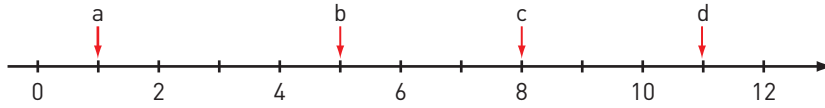


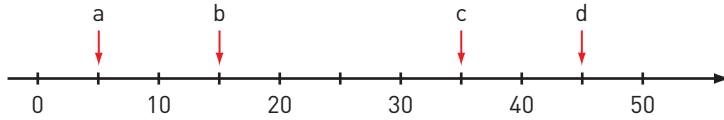
## Vilka tal pekar pilarna på?

1



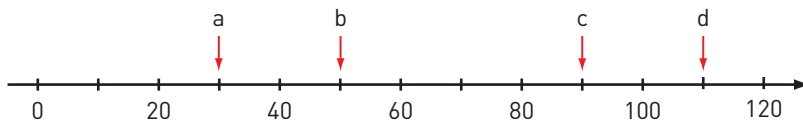
a) \_\_\_\_\_ b) \_\_\_\_\_ c) \_\_\_\_\_ d) \_\_\_\_\_

2



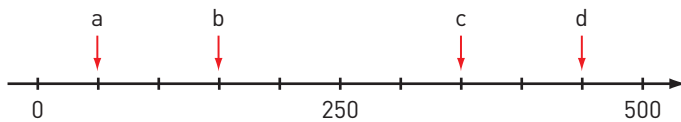
a) \_\_\_\_\_ b) \_\_\_\_\_ c) \_\_\_\_\_ d) \_\_\_\_\_

3



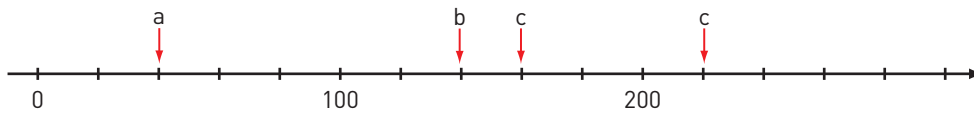
a) \_\_\_\_\_ b) \_\_\_\_\_ c) \_\_\_\_\_ d) \_\_\_\_\_

4



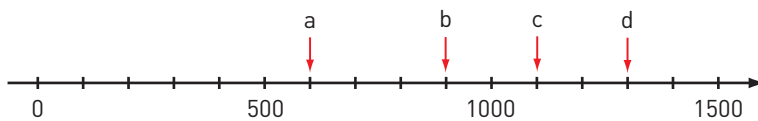
a) \_\_\_\_\_ b) \_\_\_\_\_ c) \_\_\_\_\_ d) \_\_\_\_\_

5



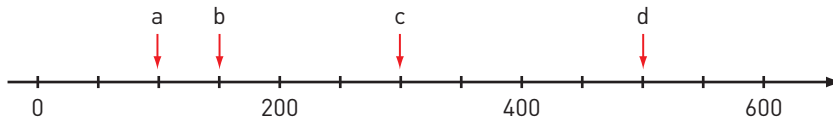
a) \_\_\_\_\_ b) \_\_\_\_\_ c) \_\_\_\_\_ d) \_\_\_\_\_

6



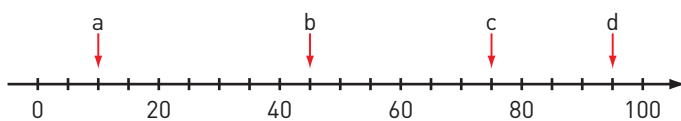
a) \_\_\_\_\_ b) \_\_\_\_\_ c) \_\_\_\_\_ d) \_\_\_\_\_

7



a) \_\_\_\_\_ b) \_\_\_\_\_ c) \_\_\_\_\_ d) \_\_\_\_\_

8



a) \_\_\_\_\_ b) \_\_\_\_\_ c) \_\_\_\_\_ d) \_\_\_\_\_

**Vilka tal pekar pilarna på?****FACIT**

- 1 a) 1  
b) 5  
c) 8  
d) 11
- 2 a) 5  
b) 15  
c) 35  
d) 45
- 3 a) 30  
b) 50  
c) 90  
d) 110
- 4 a) 50  
b) 150  
c) 350  
d) 450
- 5 a) 40  
b) 140  
c) 160  
d) 220
- 6 a) 600  
b) 900  
c) 1 100  
d) 1 300
- 7 a) 100  
b) 150  
c) 300  
d) 500
- 8 a) 10  
b) 45  
c) 75  
d) 95