
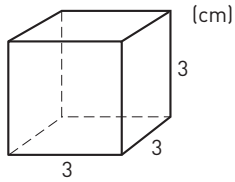

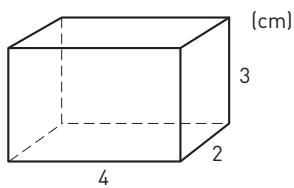


Volymen av ett rätblock


1 Hur stor volym har kuben?





2 Hur stor volym har rätblocket?



3 Hur stor volym har skokartongen? Svara i hela kubikdecimeter.



4 Beräkna kartongens volym. Svara i tiondels kubikdecimeter.



Volymen av ett rätblock

FACIT

1 27 cm^3

2 24 cm^3

3 10 dm^3

4 $3,6 \text{ dm}^3$