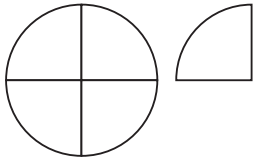


Bråkform och blandad form

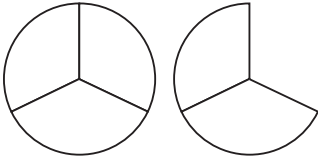
1



Blandad form: _____

Bråkform: _____

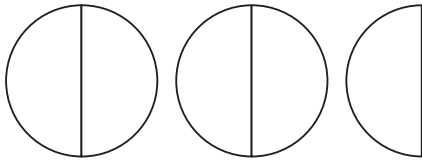
2



Blandad form: _____

Bråkform: _____

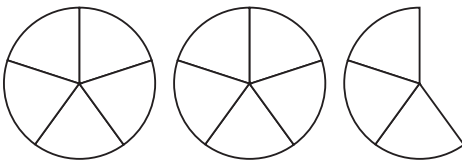
3



Blandad form: _____

Bråkform: _____

4



Blandad form: _____

Bråkform: _____

Skriv i bråkform.

5 a) $2\frac{2}{5} = \underline{\hspace{2cm}}$

b) $2\frac{3}{4} = \underline{\hspace{2cm}}$

c) $1\frac{7}{8} = \underline{\hspace{2cm}}$

6 a) $3\frac{1}{2} = \underline{\hspace{2cm}}$

b) $4\frac{1}{4} = \underline{\hspace{2cm}}$

c) $1\frac{4}{5} = \underline{\hspace{2cm}}$

7 a) $1\frac{5}{6} = \underline{\hspace{2cm}}$

b) $2\frac{2}{7} = \underline{\hspace{2cm}}$

c) $4\frac{3}{8} = \underline{\hspace{2cm}}$

Skriv i blandad form.

8 a) $\frac{3}{2} = \underline{\hspace{2cm}}$

b) $\frac{12}{5} = \underline{\hspace{2cm}}$

c) $\frac{7}{3} = \underline{\hspace{2cm}}$

9 a) $\frac{9}{4} = \underline{\hspace{2cm}}$

b) $\frac{13}{6} = \underline{\hspace{2cm}}$

c) $\frac{23}{5} = \underline{\hspace{2cm}}$

10 a) $\frac{15}{4} = \underline{\hspace{2cm}}$

b) $\frac{12}{7} = \underline{\hspace{2cm}}$

c) $\frac{19}{6} = \underline{\hspace{2cm}}$

Bråkform och blandad form**FACIT**

1 $1\frac{1}{4} = \frac{5}{4}$

2 $1\frac{2}{3} = \frac{5}{3}$

3 $2\frac{1}{2} = \frac{5}{2}$

4 $2\frac{3}{5} = \frac{13}{5}$

5 a) $\frac{12}{5}$

b) $\frac{11}{4}$

c) $\frac{15}{8}$

6 a) $\frac{7}{2}$

b) $\frac{17}{4}$

c) $\frac{9}{5}$

7 a) $\frac{11}{6}$

b) $\frac{16}{7}$

c) $\frac{35}{8}$

8 a) $1\frac{1}{2}$

b) $2\frac{2}{5}$

c) $2\frac{1}{3}$

9 a) $2\frac{1}{4}$

b) $2\frac{1}{6}$

c) $4\frac{3}{5}$

10 a) $3\frac{3}{4}$

b) $1\frac{5}{7}$

c) $3\frac{1}{6}$