



Cirkelns omkrets

1 Hur lång är cirkelns diameter. Mät i hela och halva centimeter.

a) b)

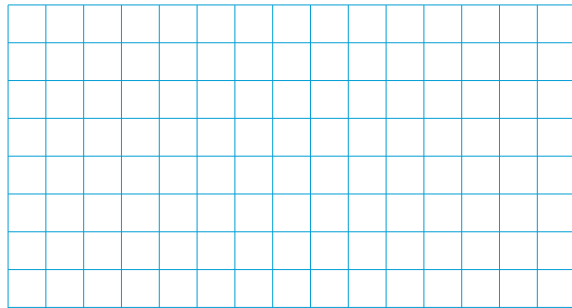



$d =$ _____

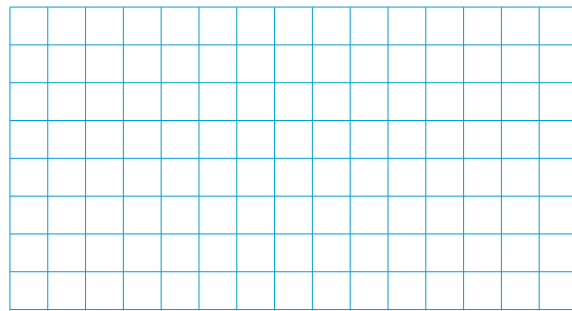
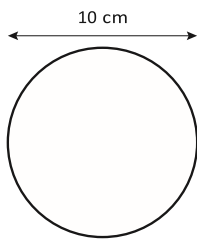
$d =$ _____




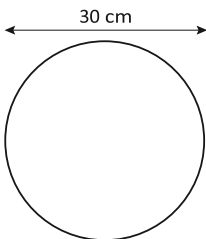
2 Beräkna cirkelns omkrets. $\pi \approx 3$



3 Beräkna omkretsen. $\pi \approx 3$



4 Beräkna omkrets. $\pi \approx 3$





FACIT

1 a) 2,5 cm b) 3 cm

2) 12 cm

3) 30 cm

4) 90 cm